

General Certificate of Education
June 2008
Advanced Subsidiary Examination



MATHEMATICS
Unit Mechanics 1A

MM1A/W

Monday 2 June 2008 9.00 am to 10.15 am

For this paper you must have:

- an 8-page answer book
- the blue AQA booklet of formulae and statistical tables.

You may use a graphics calculator.

Time allowed: 1 hour 15 minutes

Instructions

- Use black ink or black ball-point pen. Pencil should only be used for drawing.
- Write the information required on the front of your answer book. The *Examining Body* for this paper is AQA. The *Paper Reference* is MM1A/W.
- Answer **all** questions.
- Show all necessary working; otherwise marks for method may be lost.
- The **final** answer to questions requiring the use of calculators should be given to three significant figures, unless stated otherwise.
- Take $g = 9.8 \text{ m s}^{-2}$, unless stated otherwise.

Information

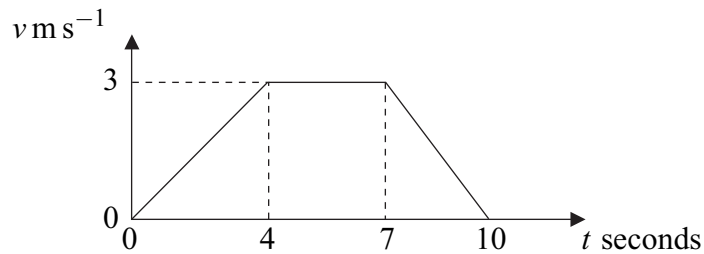
- The maximum mark for this paper is 60.
- The marks for questions are shown in brackets.
- Unit Mechanics 1A has a **written paper and coursework**.

Advice

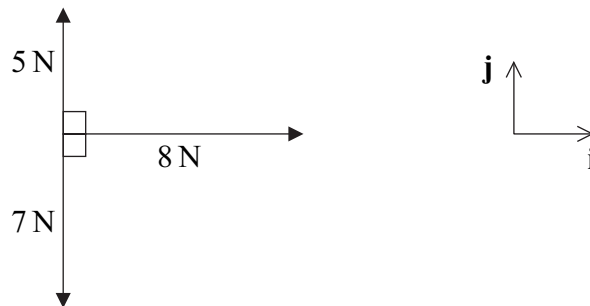
- Unless stated otherwise, you may quote formulae, without proof, from the booklet.

Answer **all** questions.

- 1 The diagram shows a velocity–time graph for a lift.



- (a) Find the distance travelled by the lift. (3 marks)
- (b) Find the acceleration of the lift during the first 4 seconds of the motion. (1 mark)
- (c) The lift is raised by a single vertical cable. The mass of the lift is 400 kg. Find the tension in the cable during the first 4 seconds of the motion. (3 marks)
- 2 The diagram shows three forces and the perpendicular unit vectors **i** and **j**, which all lie in the same plane.



- (a) Express the resultant of the three forces in terms of **i** and **j**. (2 marks)
- (b) Find the magnitude of the resultant force. (2 marks)
- (c) Draw a diagram to show the direction of the resultant force, and find the angle that it makes with the unit vector **i**. (3 marks)

- 3 Two particles, A and B , are connected by a light inextensible string, which passes over a smooth peg. Particle A is on a rough horizontal surface and has mass 3 kg . Particle B hangs freely, as shown in the diagram, and has mass 2 kg . The coefficient of friction between A and the horizontal surface is μ .



The particles are released from rest and move with a constant acceleration of magnitude 0.9 m s^{-2} .

- (a) Find the tension in the string. (3 marks)
 - (b) Draw and label a diagram to show the forces acting on particle A . (1 mark)
 - (c) Calculate the magnitude of the normal reaction force acting on A . (1 mark)
 - (d) Find the magnitude of the friction force that acts on A . (2 marks)
 - (e) Find μ . (2 marks)
- 4 An aeroplane is travelling due north at 180 m s^{-1} relative to the air. The air is moving north-west at 50 m s^{-1} .
- (a) Find the magnitude of the resultant velocity of the aeroplane. (4 marks)
 - (b) Find the direction of the resultant velocity, giving your answer as a three-figure bearing to the nearest degree. (4 marks)
- 5 A ball is kicked so that it leaves a horizontal surface, at the point A , travelling at 16 m s^{-1} and at an angle θ above the horizontal. The ball hits the surface again 2 seconds later, at the point B . Assume that the ball is a particle that moves only under the influence of gravity.
- (a) Show that $\theta = 37.8^\circ$, correct to three significant figures. (3 marks)
 - (b) Find the time for which the ball is more than 2 metres above the surface. (5 marks)

Turn over for the next question

Turn over ►

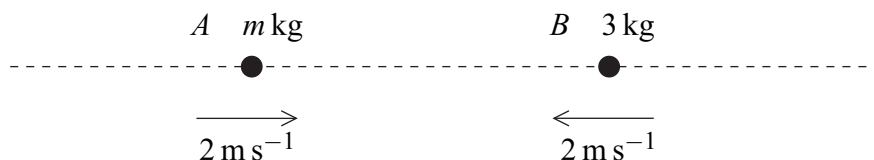
- 6 The unit vectors \mathbf{i} and \mathbf{j} are directed east and north respectively. A helicopter moves horizontally with a constant acceleration of $(-0.4\mathbf{i} + 0.5\mathbf{j}) \text{ m s}^{-2}$. At time $t = 0$, the helicopter is at the origin and has velocity $20\mathbf{i} \text{ m s}^{-1}$.

- (a) Write down an expression for the velocity of the helicopter at time t seconds. (2 marks)
- (b) Find the time when the helicopter is travelling due north. (3 marks)
- (c) Find an expression for the position vector of the helicopter at time t seconds. (2 marks)
- (d) When $t = 100$:
 - (i) show that the helicopter is due north of the origin; (3 marks)
 - (ii) find the speed of the helicopter. (3 marks)

- 7 Two particles, A and B , are travelling towards each other along a straight horizontal line.

Particle A has velocity 2 m s^{-1} and mass $m \text{ kg}$.

Particle B has velocity -2 m s^{-1} and mass 3 kg .



The particles collide.

- (a) If the particles move in opposite directions after the collision, each with speed 0.5 m s^{-1} , find the value of m . (3 marks)
- (b) If the particles coalesce during the collision, forming a single particle which moves with speed 0.5 m s^{-1} , find the two possible values of m . (5 marks)

END OF QUESTIONS